



Quiz: 3.MD.C.7.A


1. Find the area of each of the figure shown below. Write your answers in the spaces provided.



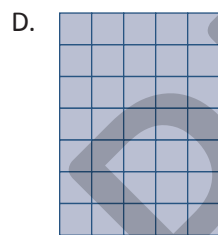
Area = _____ square units



Area = _____ square units



Area = _____ square units



Area = _____ square units

